

Name : \_\_\_\_\_ Adm Code. \_\_\_\_\_

**[Note : The summer holiday homework is to be done on separate answer sheets only and submitted to the Class teacher on the first day when the School reopens.]**  
**Children must revise the portion taught from April to May 2025**

### ENGLISH LANGUAGE

1. Read stories on famous Indian women personalities. Choose any one and collect information about her.
2. Make a slogan on a colourful sheet emphasising on the importance of reading books.
3. Taking a break once in a while is very important. Write about your favourite hobby and tell why do you enjoy doing it.

**4. Read the following passage and answer the following questions :**

Anna's favourite hobby is playing lute. She spends a lot of her free time playing lute. She started learning to play lute when she was 5 years old. She played in her school's band.

Anna's dad bought her a lute and she started practicing every day after school. It was very loud, but her mother never complained. She improved a lot, and playing lute has been her favourite hobby ever since.

- 1) What is Anna's favourite hobby ?
- 2) When did Anna start to play the lute ?
- 3) Who bought Anna a lute ?
- 4) Give a suitable title to the story.
- 5) Where did Anna perform with the lute ?

\*\*\*

### ENGLISH LITERATURE

**Q.1) Make sentences of your own using 8 to 10 words :**

- |              |               |                 |
|--------------|---------------|-----------------|
| (a) pebbles  | (b) chocolate | (c) competition |
| (d) vacation | (e) suddenly  |                 |

**Q.2) Write five sentences about how you can reuse things that we usually consider as waste.**

You may write about more than one of the following 'waste' items.

1. Notebook used in the previous class.
2. Broken toys.
3. Empty shoe boxes.

4. Empty soft drink bottles.

**Q.3) Write 10 lines to describe** “We feel happy and excited when we win a competition. How would you feel if you did not win in a competition ?”

**Q.4) Read the passage and answer the following questions:**

It was a bright and sunny morning. Rahul was excited because it was a holiday. He quickly finished his breakfast and went out to play with his friends. They decided to go to the park near their school. The park was full of green trees, colorful flowers, and singing birds. Rahul and his friends played on the swings and slides. They also played a game of hide-and-seek.

After playing, they sat under a big tree and shared their snacks. Rahul had brought sandwiches, while his friend Meena had fruits. They all shared their food happily. Before going home, they picked up all the wrappers and threw them in the dustbin. They wanted to keep the park clean.

Q.1) Why was Rahul excited in the morning ?

Q.2) Where did Rahul and his friends go to play ?

Q.3) Name two things Rahul and his friends did in the park.







Q.4) What did Rahul bring for snacks ?

**Q.5) Practice cursive writing by copying one paragraph from your English textbook everyday. Make sure you write the date each time.**

\*\*\*\*\*

## SCIENCE

**Q.1) Look at the pictures below and write ‘YES’ or ‘NO’ for each question in the boxes :**

Living or Non-living?					
	Do they breathe?	Do they eat?	Do they move?	Do they grow?	Are they living?
					
					
					
					
					
					

**Q.2) Write the functions of the following organs :**



**Q.3) Who am I ?**

- a) I protect your fragile organs. I also allow you to stand up straight. I am your \_\_\_\_\_
- b) I use my strength to move all parts of your body. I am your \_\_\_\_\_
- c) My job is to bring oxygen into your body and take carbon dioxide out. I am your \_\_\_\_\_

**Q.4) Are all non living things man made ? Explain.**

**Q.5) Activity:**

Draw two columns: “Healthy Habits” and “Unhealthy Habits”

**Task:** Draw or paste any 4 pictures under each column (e.g. brushing teeth vs. eating too many chocolates)

**Q.6) Draw a scene (a garden, a park, or your home) and label 3 living and 3 non-living things in your picture.**

\*\*\*

## MATHEMATICS

**Q.1) Fill in the missing numbers :**

- a) 1549 \_\_ , \_\_ , 1552 , \_\_ , \_\_ , 1555 , 1556 , \_\_ , \_\_ , \_\_ , \_\_ , 1561 \_\_

b) 6301 , \_\_\_\_ , \_\_\_\_ , \_\_\_\_ , 6305 , \_\_\_\_ , \_\_\_\_

c) \_\_\_\_ , \_\_\_\_ , \_\_\_\_ , 6325 , \_\_\_\_ , \_\_\_\_ , \_\_\_\_ , 6329 , \_\_\_\_ , \_\_\_\_ , \_\_\_\_ , 6333 , \_\_\_\_ , \_\_\_\_

**Q.2) Write the number names for the following numbers :**

(a) 395

(b) 242

(c) 401

(d) 709

(e) 999

**Q.3) Word problems :**

a) Peter went shopping and bought 192 cupcakes, 180 toffees and 471 chocolates. How many items did he buy together ?

b) A summer school has 512 students in the morning sessions and 329 students in the afternoon sessions. How many students are there in total ?

**Q.4) Make the following shapes using matchstick :**

**Square** : 4 matchsticks

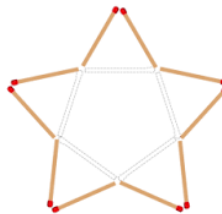
**Rectangle** : 6 matchsticks

**Triangle** : 3 matchsticks

**Rhombus** : 4 matchsticks

**Pentagon** : 5 matchsticks

**Example** : Star



\*\*\*

## **SOCIAL STUDIES**

1. We can lessen the damage caused to the environment by depending less on cars, by walking shorter distances and by using carpools.  
Mention five ways in which we can protect the environment.
2. Make a timeline representing 5 events of your life.
3. Write three lines on the important developments that have taken place in your town/city over the last ten years. Paste old and recent pictures to show the changes.

4. You must have seen blue and green coloured dustbins installed on the roadside. Why do you think we have two different coloured bins ? How are they helpful ?

\*\*\*

## COMPUTER SCIENCE

Read Chapter 1 (Computer Software), Chapter 2 (Let us know about Linux) and then answer the following questions:

**Q.1) List any three Mouse Pointer shapes and write their functions :**

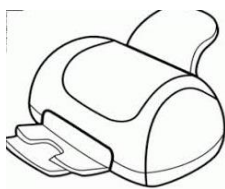
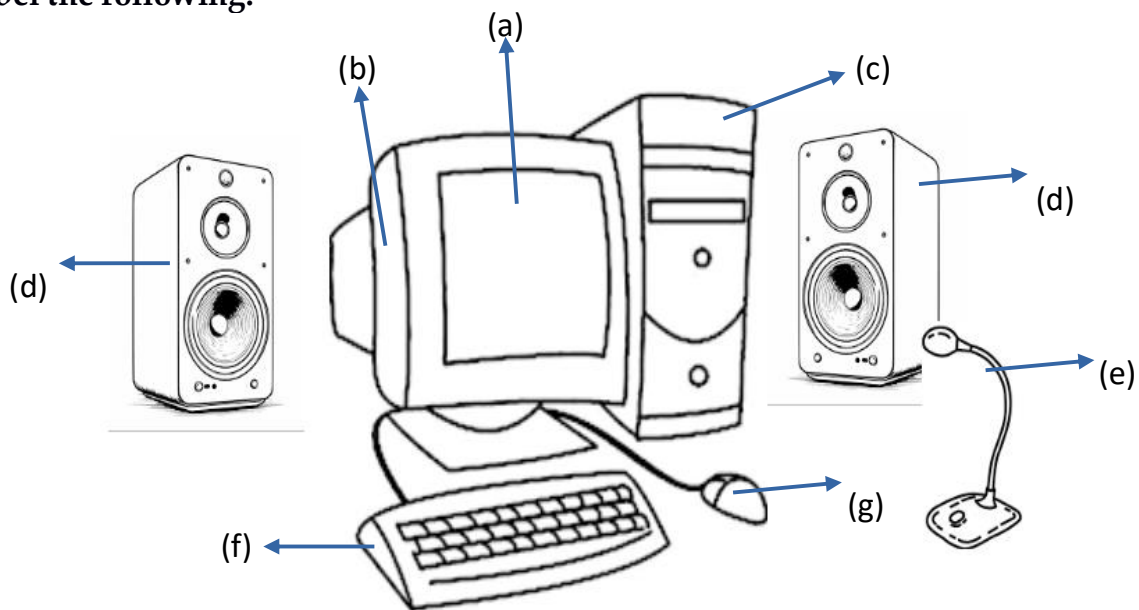
**Q.2) Rearrange the letter to get correct words:**

- (a) RARHDWEA
- (b) EYSTMS OFATWREF
- (c) SSERPMI
- (d) XUNIL
- (e) SNCANER

**Q.3) Mohit wants to play a song on his computer, what type of software should he use ?**

**Q.4) List any four components of the Unity Desktop.**

**Q.5) Label the following:**



Name the parts and write their functions :

(a)

(b)

\*\*\*

