

Name : _____ Adm Code. _____

[Note : The summer holiday homework is to be done on these sheets only and submitted to the subject teachers on the first day when the School reopens.]

* Please note that a written marked assignment will be given to the children when School reopens in July 2022, based on the holiday homework.

Children must revise the portion taught from April to May 2022

ENGLISH LANGUAGE

A) Fill in the vowel to complete each word:

1. B___ ___ K

2. W___ LL

3. P___NC___L

4. DR___M

B) Underline the NOUN in each sentence:

1. Riya likes to dance.


2. A parrot is green in colour.

C) Name the person:

1. I stitch clothes. I am a _____.

2. I teach in a school. I am a _____.

D). Name and colour the following pictures :-





END

SUBJECT - ENGLISH LITERATURE

Name : _____ Adm Code. _____

A. Fill in the blanks:

1. Thewas left far behind.
2. All the animals began to
3. Big Ears into something.

B. Complete the following words:

1. H ____ R ____ N ____
2. C ____ V ____
3. S ____ T ____ G

C. Write the meaning of the given words:

1. hare -
2. funny-

D. Make sentences with the given words:

1. lonely -
2. slowly -

E. Draw and colour the picture of a tortoise.

END

SUBJECT - E. V. S

Name : _____ Adm Code. _____

1) Fill in the blanks :

A) Fill in the blanks :

1. Our _____ help us to hear sounds.
2. Our _____ helps us feel things.

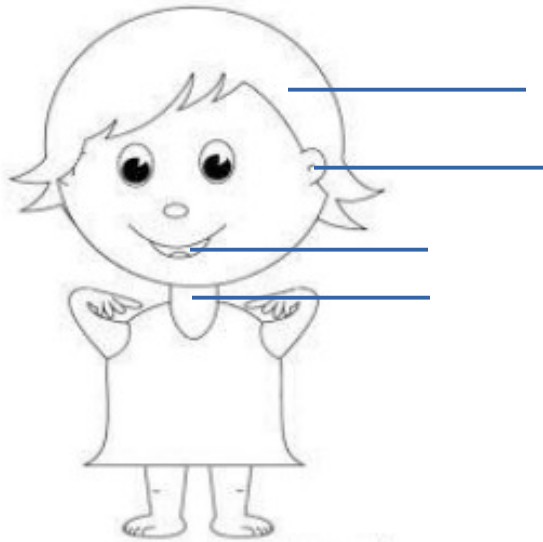
B). Rearrange the jumbled words:-

1. HNDA - _____
2. FIGNRE- _____

C). Name and colour the picture:-



D). Colour and label the parts of a body:-




END

SUBJECT - MATHEMATICS

Name : _____ Adm Code. _____

A. Count and write the numbers:





B. What comes before, after and in between:

3234

56.....58

.....36

99.....

54.....

.....72

C. Write in ascending order:

36 63 98 45

D. Write in descending order:

99 15 86 55

E. Add the following:

32	11	54
+ 23	+ 35	+ 24
.....
.....

*** END ***

SUBJECT - COMPUTER SCIENCE

Name : _____ Adm Code. _____

1) Answer in one word :-

- 1) Name the type of computer that is smaller than a tablet. _____
- 2) A refrigerator works on _____
- 3) The first computer game was _____
- 4) A place where computers are used to book tickets. _____

2) Answer the following:-

Q 1. Name the four types of computers.

Ans : _____

Q 2. Draw or paste pictures of any two machines that work on electricity.

Q 3. Draw or paste pictures of any two machines that work on fuel.

Q 4. Draw or paste pictures of any two machines that work on human power.

END