









SAINT JOHN'S ACADEMY (UP 126)
CLASS I SEC..... MATHEMATICS WINTER VACATION HOMEWORK 2018 - 19

Name : _____ Roll No. _____ Adm. Code. _____

1) Write the names and match the solid shapes with the objects :

1) _____			
2) _____			
3) _____			
4) _____			

2) Data handling :

Q.1) Which items are less in number ?




Ans. _____

Q.2) How many trees are there ?





Ans. _____




Q.3) How many items are there in all ?

Ans. _____

3) Complete the pattern :

a)     _____ _____

b)    _____ _____

4) Multiply :

a) $3 \times 5 =$ _____

b) $2 \times 4 =$ _____

c) $4 \times 6 =$ _____

5) Which sign do we use for the following ? Draw them :

a) Division _____

b) Multiplication _____

6) Solve :

a)
$$\begin{array}{r} 32 \\ + 14 \\ \hline \end{array}$$

b)
$$\begin{array}{r} 87 \\ - 53 \\ \hline \end{array}$$