

SAINT JOHN'S ACADEMY

WINTER HOLIDAY HOMEWORK (2018-2019)

CLASS- II

SUBJECT- ENGLISH LANGUAGE

Name \_\_\_\_\_ Sec \_\_\_\_\_ Date \_\_\_\_\_

A) Tick the correct answer:

1. Tom \_\_\_\_\_ a red cap.  
a) has                      b) was                      c) have                      d) is
2. We use a \_\_\_\_\_ instead of a noun.  
a) verb                      b) pronoun                      c) adverb                      d) antonyms
3. They fall from the trees in autumn.  
a) leaves                      b) books                      c) papers                      d) fruits
4. The books are kept \_\_\_\_\_ the table.  
a) on                      b) at                      c) in                      d) of

B) Complete the sentences using am, is or are:

1. He \_\_\_\_\_ an engineer.
2. I \_\_\_\_\_ at office now.
3. You \_\_\_\_\_ very sleepy today.
4. Priya \_\_\_\_\_ a very good student.

C) Rewrite the sentences changing was and were to wasn't and weren't:

1. He was tired last night.  
\_\_\_\_\_
2. The lemons were very sour.  
\_\_\_\_\_
3. It was my birthday yesterday.  
\_\_\_\_\_
4. The boys were playing in the park.  
\_\_\_\_\_

D) Look at the pictures and answer the following questions:




Q.1 What is Ria doing?

Ans: \_\_\_\_\_  
\_\_\_\_\_



Q.2 What is David drinking?

Ans: \_\_\_\_\_  
\_\_\_\_\_



Q.3 What is Aman doing?

Ans: \_\_\_\_\_  
\_\_\_\_\_

\*\*\*END\*\*\*

SAINT JOHN'S ACADEMY

WINTER HOLIDAY HOMEWORK (2018-2019)

CLASS- II

SUBJECT- ENGLISH LITERATURE

Name \_\_\_\_\_ Sec \_\_\_\_\_ Date \_\_\_\_\_

(Read chapters 8, 9 and 11 from your English Literature book and answer the following questions)

A) Use a dictionary to write the correct meaning of the following words:

1. parsley - \_\_\_\_\_

2. dreadfully - \_\_\_\_\_

3. lad - \_\_\_\_\_

4. destroyed - \_\_\_\_\_

B) Make sensible sentences:

1. polite - \_\_\_\_\_

2. cunning - \_\_\_\_\_

C) Fill in the blanks:

1. The lion was the \_\_\_\_\_ of the jungle.

2. The jackals were his \_\_\_\_\_.

3. The young neem plant was full of \_\_\_\_\_.

4. Peter Rabbit lived with his family in \_\_\_\_\_.

D) Answer the following questions:

Q.1 Where did Mrs. Rabbit ask the bunnies to go?

Ans: \_\_\_\_\_

Q.2 What kind of a ruler was the king?

Ans: \_\_\_\_\_

Q.3 Who were very cunning?

Ans: \_\_\_\_\_

\*\*\*END\*\*\*

SAINT JOHN'S ACADEMY

WINTER HOLIDAY HOMEWORK (2018-2019)

CLASS- II

SUBJECT- ENVIRONMENTAL STUDIES

Name \_\_\_\_\_ Sec \_\_\_\_\_ Date \_\_\_\_\_

(Read Lesson 12, 13 and 14 from your E.V.S book and answer the following)

A) State the kind of the following plants:

1. Neem - \_\_\_\_\_
2. Coriander - \_\_\_\_\_
3. Rose - \_\_\_\_\_
4. Grapevine - \_\_\_\_\_
5. Jasmine - \_\_\_\_\_

B) Write any one thing we get from the following plants:

1. Sunflower - \_\_\_\_\_
2. Tulsi - \_\_\_\_\_
3. Rose - \_\_\_\_\_
4. Cotton - \_\_\_\_\_

C) How do the following animals move?

1. Snake - \_\_\_\_\_
2. Fish - \_\_\_\_\_
3. Cow - \_\_\_\_\_

D) Think and answer correctly:

1. It lives both on land and in water. \_\_\_\_\_
2. It builds an anthill. \_\_\_\_\_
3. It grows into a butterfly. \_\_\_\_\_
4. Who treats sick animals? \_\_\_\_\_

\*\*\*END\*\*\*

**SAINT JOHN'S ACADEMY**  
**WINTER HOLIDAY HOMEWORK (2018-2019)**  
**CLASS- II                      SUBJECT- COMPUTER SCIENCE**

Name \_\_\_\_\_ Sec \_\_\_\_\_ Date \_\_\_\_\_

(Read Lesson 6,7 and 8 from your computer book)



**A) Fill in the blanks:**

1. To select an item, the \_\_\_\_\_ button of a mouse is pressed once.
2. The slant arrow on the screen is called a \_\_\_\_\_.
3. A \_\_\_\_\_ mouse has a ball under it.
4. \_\_\_\_\_ tool in Tux Paint is used to fill bricks in the picture.
5. We can rotate a shape up to \_\_\_\_\_ degrees.
6. \_\_\_\_\_ tool in Tux Paint is used to draw and give amazing effects to a picture.

**B) List three functions of a mouse:**

1. \_\_\_\_\_
2. \_\_\_\_\_
3. \_\_\_\_\_

**C) Draw and label any two tools:**



**D) Draw and label the main parts of a mouse.**



**\*\*\*END\*\*\***



**SAINT JOHN'S ACADEMY**  
**WINTER HOLIDAY HOMEWORK (2018-2019)**  
**CLASS- II                      SUBJECT- MATHEMATICS**

Name \_\_\_\_\_ Sec \_\_\_\_\_ Date \_\_\_\_\_





**A) Fill in the blanks with suitable answers:**

1. Repeated subtraction is called \_\_\_\_\_.
2. \_\_\_\_\_ is the standard unit for measuring length.
3. The length of my ruler is \_\_\_\_\_ cm.
4. Rs 1 = \_\_\_\_\_ paise.
5. 1 metre = \_\_\_\_\_ centimeter.

**B) Match the following:**

1.  a) least capacity
2.  b) more capacity

**C) Students of Saint John's Academy are celebrating Christmas. Following is the list of things they bought for celebration:**

S.No.	Name	Items
1.	David	
2.	Peter	
3.	Zoya	
4.	Hania	

By looking at the above list answer the following:

Q.1 How many students bought the things for the Christmas celebration?

Ans: \_\_\_\_\_

Q.2 Who bought stars?

Ans: \_\_\_\_\_

Q.3 Who bought the most number of items?

Ans: \_\_\_\_\_

Q.4 Who bought the least number of items?

Ans: \_\_\_\_\_

Q.5 How many items were bought altogether?

Ans: \_\_\_\_\_

D) Divide:

a)  $24 \div 3 =$  \_\_\_\_\_

b)  $81 \div 9 =$  \_\_\_\_\_

c)  $7 \div 7 =$  \_\_\_\_\_

\*\*\*END\*\*\*