

NAME : _____

ADM CODE. _____

[TO BE DONE ON THE SHEET ITSELF]

ENGLISH LANGUAGE

1) Fill in the blanks with the clues given.

a) It is a liquid that is white in colour : _____

b) It is a bird that says , 'quack, quack' : _____

c) It is a bird that is black in colour : _____

d) It is a place where you can play : _____

2) Write the names of any two animals and two fruits that have at least two vowels in them.

Animals : a) _____

b) _____

Fruits : a) _____

b) _____

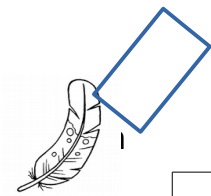
3) Sentences are jumbled up. Put them in the correct order.

a) class 2 in am i.


b) playing are they hockey.

c) full of oranges basket the is.


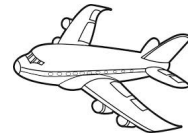
4) Match the pictures to a, an or the "



Fan




Aeroplane



Taj Mahal

a
an
the

Elephant



ENGLISH LITERATURE

Read Lesson -2 and Lesson -3 in English Grafalco Comprehension and answer the following:

1) Write suitable meanings for the following words.

- a) started - _____
- b) flung - _____
- c) quick - _____
- d) gathered - _____

2) Make sentences.

- a) stroll - _____
- b) ashamed - _____
- c) watching - _____
- d) finished - _____

3) Tick the correct answer.


- a) Pedro and Jerry were two (old / young) friends.
- b) Johnny was eating a (banana / pomegranate) under a tree in a park.
- c) Pedro (always / never) carried the umbrella.
- d) A (rabbit / monkey) sitting nearby also had a banana in his hand.

4) Fill in the blanks.

- a) Johnny was making _____ faces.
- b) The _____ was full of holes.
- c) A few dark _____ gathered in the sky.
- d) The monkey put the banana peel into the _____ .



ENVIRONMENTAL STUDIES

1) Draw or paste pictures of different foods that we get from plants on the tree and name them.




2) Write the name of your best friend and write any two good qualities of him / her.

3) Draw, name and colour any two sense organs.

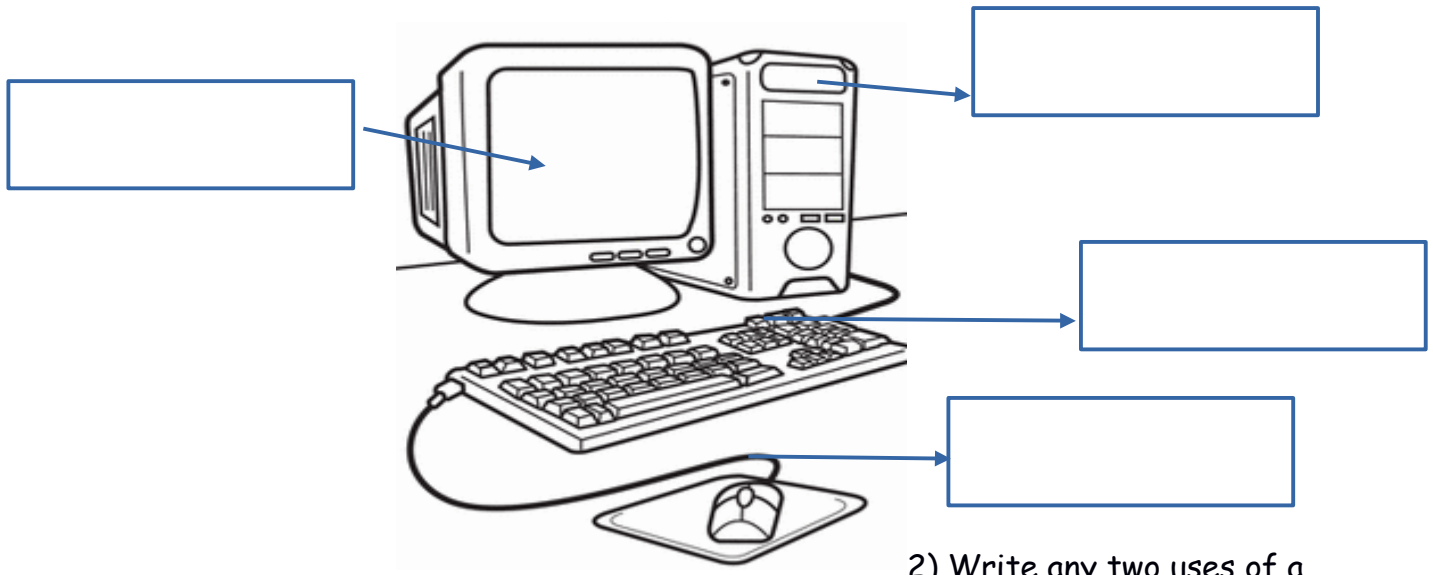


4) Name the following body parts.



COMPUTER SCIENCE

1) Label the following parts of a computer.



2) Write any two uses of a computer.

a) _____

b) _____

3) Draw or paste and name any two types of computer .

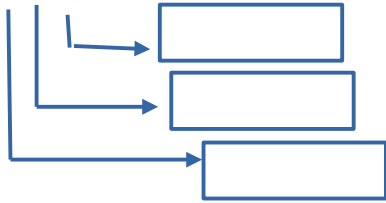
A large empty rectangular box for drawing or pasting a computer type.

A large empty rectangular box for drawing or pasting a computer type.

MATHEMATICS

1) Give the place value of these numbers.

a) 3 4 5



2) Write in expanded form.

a) 748 - _____

b) 919 - _____

3) What comes before, after and in between ?

a) _____ 639

b) _____ 132

c) 749 _____

d) 999 _____

e) 675 _____ 677

4) Add the following :

$$\begin{array}{r} \text{T O} \\ 15 \\ 18 \\ \hline \end{array}$$

$$\begin{array}{r} \text{T O} \\ 19 \\ \hline \end{array}$$

5) Write in :

Ascending order: 223 , 523 , 442 , 556

Descending order : 613 , 684 , 848 , 738

