

SAINT JOHN'S ACADEMY, ALLAHABAD
SUMMER VACATION ASSIGNMENT - 2017-18
CLASS : I SEC: _____

NAME : _____ ADM. CODE _____

ENGLISH LANGUAGE

1) Write the name of your favourite ice-cream flavour and count the Vowels and Consonants in it :

1. My favourite ice-cream flavour is _____ .
2. It has _____ vowels and _____ consonants.



2) Arrange the words in alphabetical order :

1) pear ; mango ; apple ; grapes

2) hen ; pigeon ; swan ; crow

3) Fill in the blanks with Articles :

1. _____ apple a day keeps _____ doctor away.
2. _____ Taj Mahal is in Agra.
3. I have _____ teddy bear.

4) Rewrite the sentences using Capital letters and Punctuation marks :

1) i saw a cricket match on friday

2) how do you do

P.T.O

[PAGE 2]

5) Re-arrange the words to make meaningful sentences :

1) live in Allahabad .

2) father works in hospital .

ENGLISH LITERATURE


Read the chapter 5 from English Literature book and answer the following questions :

1) Circle the correct answer :

1. The fox was very (hungry / thirsty).
2. Babu was a (blind / young) old man.
3. The grapes were hanging very (low / high).
4. Babu came (out / in) of the house.

2) Make sentences to describe the following pictures :





3) Write the rhyming word for the given words :

1) road _____

2) bunch _____

4) Answer the following :

Q.1) Who was very thirsty ?

Ans

Q.2) Who was Babu ?

Ans. _____

[PAGE 3]

5) Complete the sentences :

1. It was a _____ day.

2. A fox was very _____ .
3. He saw a bunch of _____ .
4. The grapes looked _____ and lovely.

COMPUTER SCIENCE

A) Fill in the blanks :

1. _____ saves our time.
2. My parents go to _____ to deposit money.
3. I play games on a computer at _____ .

B) Write 4 uses of a computer :

- 1) _____
- 2) _____
- 3) _____
- 4) _____

c) Name it :

1. A machine that runs on electricity : _____
2. A machine that runs on fuel : _____
3. A machine that works on human power : _____

D) Find and encircle the names of places where computers are used :

H O M E X E O T

E X B A N K T O

H O S P I T A L


L A I R P O R T

U W O F F I C E

P.T.O





[PAGE 4]

E) Draw and name any two parts of a computer :

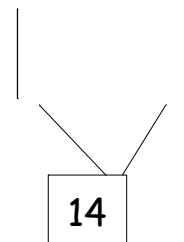
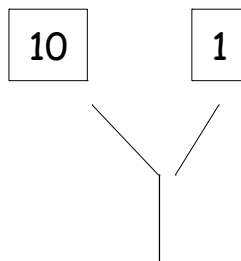
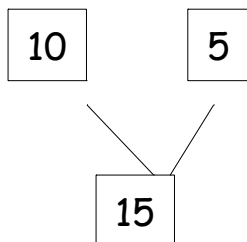
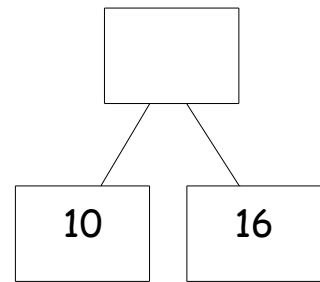
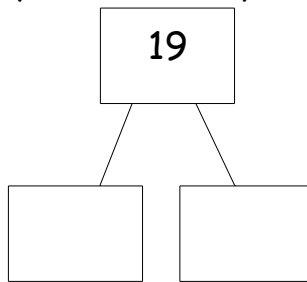
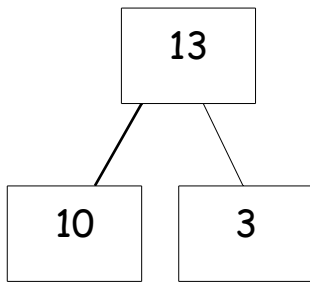


MATHEMETICS

1) Tick the correct answer :

	Objects	Roll	Slide
1.			
2.			
3.			
4.			

2) Fill in the boxes with the help of the example :

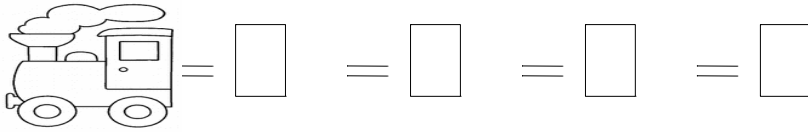


3) Fill in the boxes :

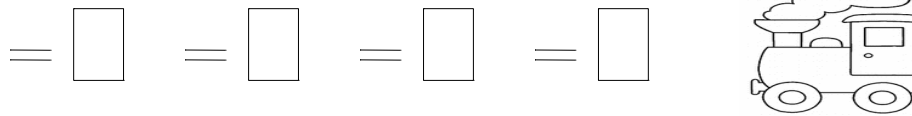
a) 4 tens and 5 ones =

b) 39 tens = tens + ones

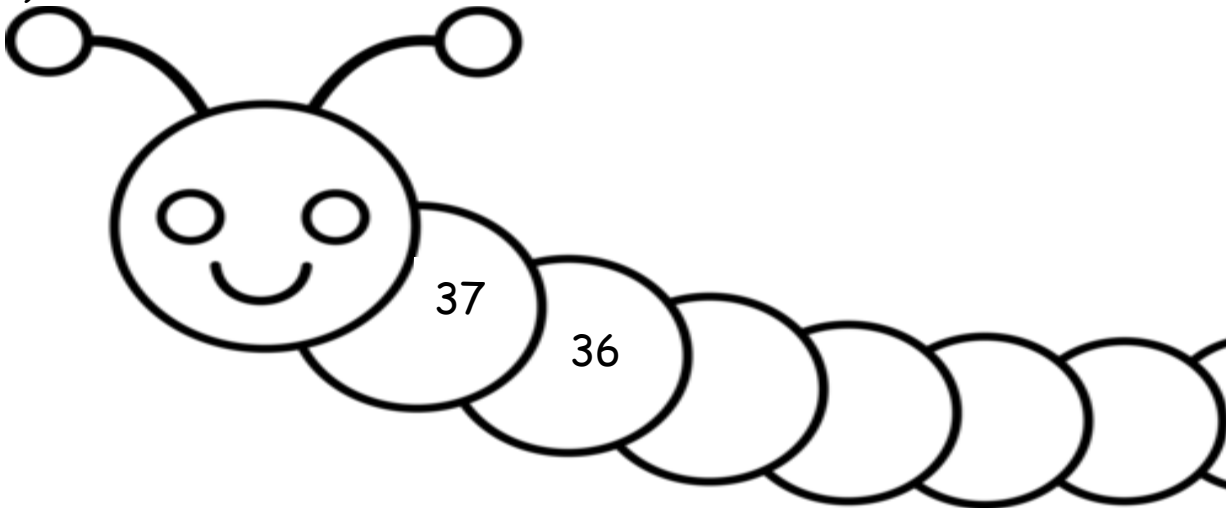
4) Arrange the numbers in ascending order : 42 , 39 , 24 , 56



5) Arrange the numbers in ascending order : 60 , 32 , 57 , 75



6) Count backwards :



7) Fill in the blanks :

a) $6 + \quad = 9$

b) $7 - 5 =$

c) $10 + \quad = 12$

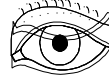
ENVIRONMENTAL STUDIES

1) Name any two :

- a) Food we get from plants : _____
- b) Milk products : _____

2) Fill in the blanks with the clues given :

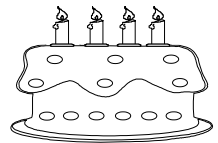
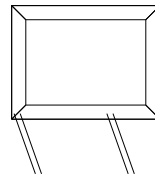
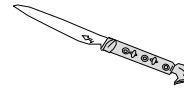
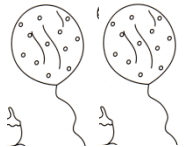
- a) We see this beautiful world with our _____ .
- b) We hear the School bell with our _____ .
- c) We smell the flower with our _____ .
- d) We taste the food with our _____ .
- e) We feel whether it is hot or cold with our _____ .



3) Answer in one word :


- a) Father and mother are called _____ .
- b) One's own brother and sister are called _____ .

4) You have gone to a birthday party of your friend. Colour the items you see in the party.




5) Draw / Paste and name the food which we eat for :

Breakfast



Lunch



Dinner

