

SAINT JOHN'S ACADEMY
CLASS- III SUMMER HOLIDAY ASSIGNMENT (2017-2018)
SUBJECT- ENGLISH LITERATURE (TO BE DONE ON THE SHEET ITSELF)

NAME : _____ ADM CODE: _____

Q.1 Make sentences :-

1. beautiful - _____ .
2. promised - _____ .
3. huge - _____ .
4. selfish - _____ .

Q.2 Consult your dictionary to find out the meanings of the following words :

1. cluster - _____
2. expedition - _____
3. favourite - _____
4. frequently - _____

Q.3 Add suffixes y, ly or ful to these words to make new words.

1. cream - _____
2. thick - _____
3. colour - _____
4. wonder - _____

Q.4 Reference to the context :-

“My father needs spectacles. He can't see properly”.

Read the above lines and answer the following questions.

a) Who said these words and to whom ?

Ans : _____.

b) What had his father done ?

Ans : _____.

c) What floated inside the shop ?

Ans : _____.

d) From which chapter this line has been taken ?

Ans : _____.

Q.5 Pick the words from the box to describe the giant.

angry,	kind,	selfish,	generous,	happy,	cruel
--------	-------	----------	-----------	--------	-------

Before

After

Q.6 Fill in the blanks with the opposites of the words underlined by using 'un'.

1. He is known to my father but _____ to me.
2. Reena is an intelligent girl but her brother is _____ .
3. My grand mother told me an interesting story but actually it was _____ .
4. Jack is happy but his sister is _____ .

NAME : _____ ADM CODE: _____

Q.1 Complete this word ladder :-

1. A summer fruit .
2. You put on your hair .
3. A wild animal .
4. Birds make this .
5. A clock tells you this .
6. An animal with a trunk .




--	--	--	--	--




--	--	--	--





--	--	--	--



Q.2 Rewrite these sentences using full – stops (.) or question marks (?) and capital letters.

1. rohan is talking on the phone.

2. agra and jaipur are famous cities.

3. where is ali going

Q.3 Fill in the blanks in the given sentences using plural form of the words given in the brackets.

1. Many _____ (child) came to participate in the competition .

2. In the accident, he broke two of his _____ (tooth) .

3. The farmer wants a pair of _____ (ox) to plough his fields.

Q.4 Change one letter of each word to make a new word. Do not change the order of the letters.
(one is done for you).

Eg : boat – goat


1. look - _____

2. sound - _____

3. ball - _____

4. prick - _____

Q.5 Aliens have come to visit you for the vacations. Answer the questions given below with the help of your imagination and colour the picture given below.



Cont....

1. What did they look like ?

Ans : _____.

2. From where had they come ?

Ans : _____.

3. What did you do with them during their visit ?

Ans : _____.

4. Name the alien who became your best friend ?

Ans : _____.

5. How did they come ?

Ans : _____.

SAINT JOHN'S ACADEMY
SUMMER HOLIDAY ASSIGNMENT (2017-2018)
CLASS- III SUBJECT- MATHEMATICS (TO BE DONE ON THE SHEET ITSELF)

NAME : _____ ADM CODE: _____

Q.1 Answer the following questions :-

1. Write the smallest four digit number _____ .
2. Which is the first even number that comes after 460 ? _____ .
3. Write the number that comes just after 4567 . _____ .
4. Write the successor of the largest 3 - digit number. _____ .
5. A village has 4095 males and 3890 females. Which is less in number, male or females ?
_____ .

Q.2 Fill in the blanks :-

1. $4000 + \underline{\hspace{2cm}} = 4500$
2. Increase 100 by 20 _____ .
3. $8000 + 300 + 50 + 5 = \underline{\hspace{2cm}}$.
4. $125 - \underline{\hspace{1cm}} = 100$
5. Odd number + even number = _____ number.

Q.3 Rewrite in ascending order :-

1,348 , 3,515 , 6,381 , 2,518 : _____

Q.4 Rewrite in descending order :-

4,295 , 6,891 , 7,263 , 6,183 : _____

Q.5 Count and write as per instructions :-

1. Count in tens :
763 ; 773 ; _____ ; _____ .
2. Count in hundreds :
5,340 ; 5,440 ; _____ ; _____ .
3. Count in thousands :
5,112 ; 6,112 ' _____ ; _____ .

Q.6 Use three digits to build the greatest and smallest numbers :-

- | | <u>greatest number</u> | <u>smallest number</u> |
|------------------|------------------------|------------------------|
| 1. 3, 7, 2, 9 | _____ | _____ |
| 2. 1, 2, 6, 7, 8 | _____ | _____ |

Q.7 Write the place value of the underlined digits :

1. 6 3 2 1 - _____

2. 1 5 3 7 - _____

3. 4 1 9 7 - _____

4. 9 0 9 1 - _____

Q.8 Separate the even numbers and the odd numbers :-

106, 133, 148, 151, 169, 172, 195, 200

Even numbers : _____ .

Odd numbers : _____ .

Q.9 Identify the numbers given in the following sentences and write their number names :

- Mount Everest is the highest mountain in the world and its peak is 8,848 metres above the sea level.

Number Name : _____

_____ .

- The river Nile is the longest river in the world and its length is 6,853 kms.

Number Name : _____

_____ .

Q.10 Fill in the missing numbers :-

1)	H	T	O
	4	0	5
+	2	<div style="border: 1px solid black; width: 50px; height: 20px; display: inline-block;"></div>	2
<hr/>			
		4	7


2)	H	T	O
	<div style="border: 1px solid black; width: 50px; height: 20px; display: inline-block;"></div>	<div style="border: 1px solid black; width: 50px; height: 20px; display: inline-block;"></div>	5
-	2	3	4
<hr/>			
	1	5	1

SAINT JOHN'S ACADEMY
CLASS- III **SUMMER HOLIDAY ASSIGNMENT (2017-2018)**
SUBJECT- SOCIAL STUDIES (TO BE DONE ON THE SHEET ITSELF)

NAME : _____ ADM CODE: _____

Q.1 Look at picture given below and list some things that are found in a neighbourhood.

Colour the picture.



- 1) _____
- 3) _____
- 5) _____
- 7) _____

- 2) _____
- 4) _____
- 6) _____
- 8) _____

Q.2 Answer in one word :-

1. They guard our country and keep it safe - _____
2. We go there when we fall sick - _____
3. People who travel in a spacecraft - _____
4. A grown – up person - _____

Q.3 Match the following :

- | | |
|------------------|---------------------|
| 1. Wheel | a) thief |
| 2. Grand parents | b) having good luck |
| 3. Police | c) early human. |
| 4. Fortunate | d) family. |



Q.4 Fill in the blanks:

1. We should love and respect _____ .
2. _____ treat us when we fall sick .
3. We need _____ clothes in cold weather.
4. You change when you grow _____ .


Q.5) Paste 1 related picture in each block given below :



Land Transport



Water Transport



Air Transport

SAINT JOHN'S ACADEMY

CLASS- III SUMMER HOLIDAY ASSIGNMENT (2017-2018)

SUBJECT- COMPUTER SCIENCE (TO BE DONE ON THE SHEET ITSELF)

NAME : _____ ADM CODE: _____

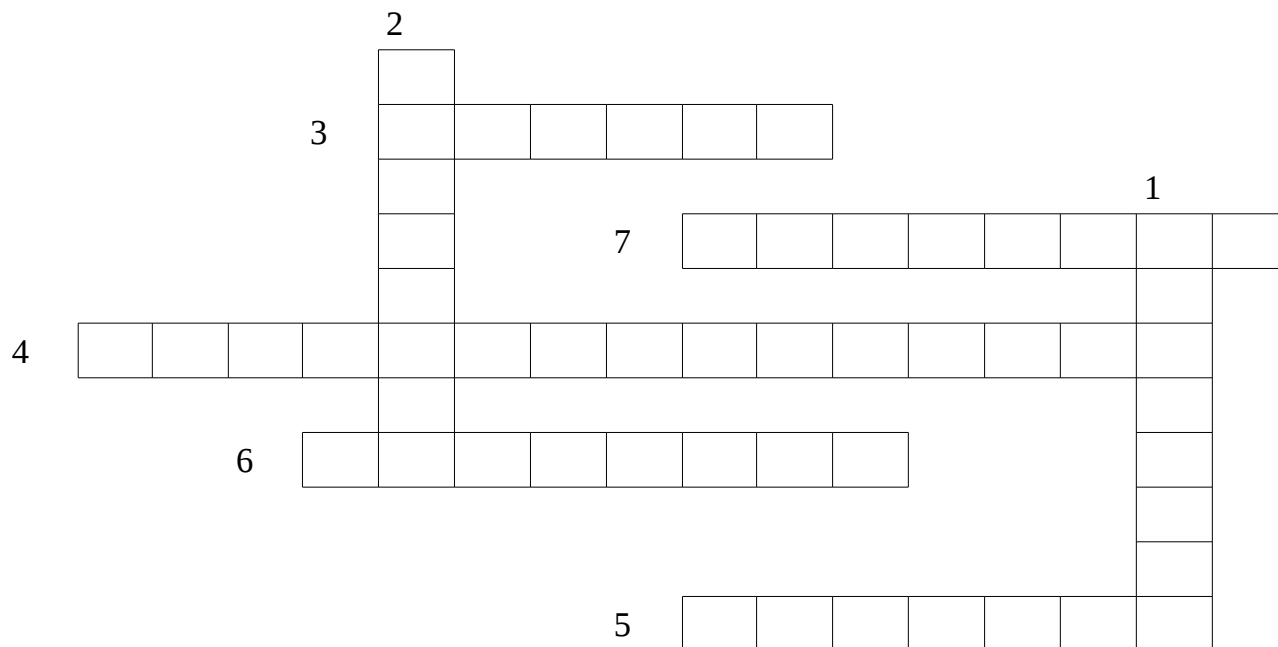
Q.1 Write the full form of the following :-

1. CD - _____ .
2. LCD - _____ .
3. LED - _____ .
4. VDU - _____ .

Q.2 One word answer :-

1. Printed copy of the output - _____
2. First computer programmer - _____
3. World's largest computer processor company - _____

Q.3 Complete the crossword puzzle using the hints given below :-



1. I am a machine that can do various job _____ .
2. I am a part of a computer that cannot be touched and seen _____ .
3. The result that we get on the screen is called _____ .
4. I am a part of the system software that makes a computer run _____ .
5. I play music stored in a computer _____ .
6. I am a device that is used to type words, letters and characters _____ .
7. I am a device that is used for playing games _____ .

Q.4 Draw/ Paste 2 Input, 2 Output, 2 Storage devices and label them.














SAINT JOHN'S ACADEMY
SUMMER RECAPITULATION (2017-2018)
CLASS- III SUBJECT- SCIENCE (DONE IN THE PAPER ITSELF)

Q.1 Name the following:


- (a) Largest bird that lays the largest egg. _____.
- (b) Waste product of our body _____.
- (c) They cover a bird's body and wings _____.
- (d) A person who looks after the sick animals _____.
- (e) Our lungs expand during this process _____.

Q.2 Draw or paste the following pictures :



A) One living thing.





B) One non-living thing.



(a) Beak of a duck and a woodpecker



(b) Foot of a hen and an owl.



(c) Causes of air pollution.

Q.3 Write differences between living and non-living things.

Q.4 Define the following:

a) Pollution: _____

b) Gills: _____

Q.5 Answer the following:

a) Why do birds build nest?

Ans : _____

b) How does a cat use its whiskers?

Ans : _____

Q.6 label the digestive system:

